

- 1 This clock shows the time Avi has art class every Monday. What time does the clock show?



- A 7:00
 - B 8:00
 - C 7:45
 - D 8:45
- 2 How many minutes are in 1 hour?



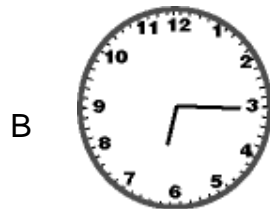
- A 60
- B 1
- C 2
- D 3

- 3 This clock shows the time Sid has guitar lessons every Saturday. What time does the clock show?



- A 2:10
- B 2:15
- C 3:00
- D 3:10

- 4 Mrs. Powers gets home from work at 3:45. Which clock shows 3:45?




- 5 Which clock shows 1:45?



6 Which clock shows 6:30?



7 The clock shows the time Mrs. Bell's class goes to music. What is another way to say this time?



- A 15 minutes after 1
- B 1 o'clock
- C half past 1
- D 10 minutes after 1

- 8 David went to the dentist at 45 minutes after 5. Which clock shows 45 minutes after 5?



- 9 Mr. Marrero mows his lawn. About how long does it take?

- A About 1 second
- B About 1 minute
- C About 1 hour
- D About 1 day

- 10 Simon went roller skating. Which estimate tells about how long he might roller skate?

- A about 3 minutes
- B about 3 hours
- C about 3 seconds
- D about 3 days

- 11 Which can you do in about 1 day?
- A go to a family reunion
 - B skate around the block
 - C make your bed
 - D brush your teeth
- 12 Which estimate tells about how long a haircut might take?
- A about 30 days
 - B about 30 hours
 - C about 30 seconds
 - D about 30 minutes