




Pizza Order



The numbers from **least** to **greatest** are 45, 54, and 60.

Write each group of numbers from **least** to **greatest**.



10 30 20

10 20 30

18 23 14

45 48 52

34 41 29

60 47 59

75 57 68

35 27 31

67 82 53

90 68 77
